

GRADE ONE MID TERM 1 EXAMS-2019

MATHEMATICS

NAME SCHOOL

Fill the missing numbers

1. 1 _____ 6 _____
 _____ 10 _____

Count and write



Write in words

5. 4 _____
 6. 2 _____
 7. 1 _____
 8. 3 _____

Put together




Take away



13. $5 - 2 =$ _____



15. Which one holds more water?



A

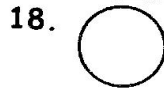


B _____

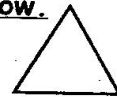
Complete the patterns below.



Name the shapes below.



19. _____



(triangle, circle, rectangle)

Write in order

21. 4 3 1 2 5

Draw the beads

