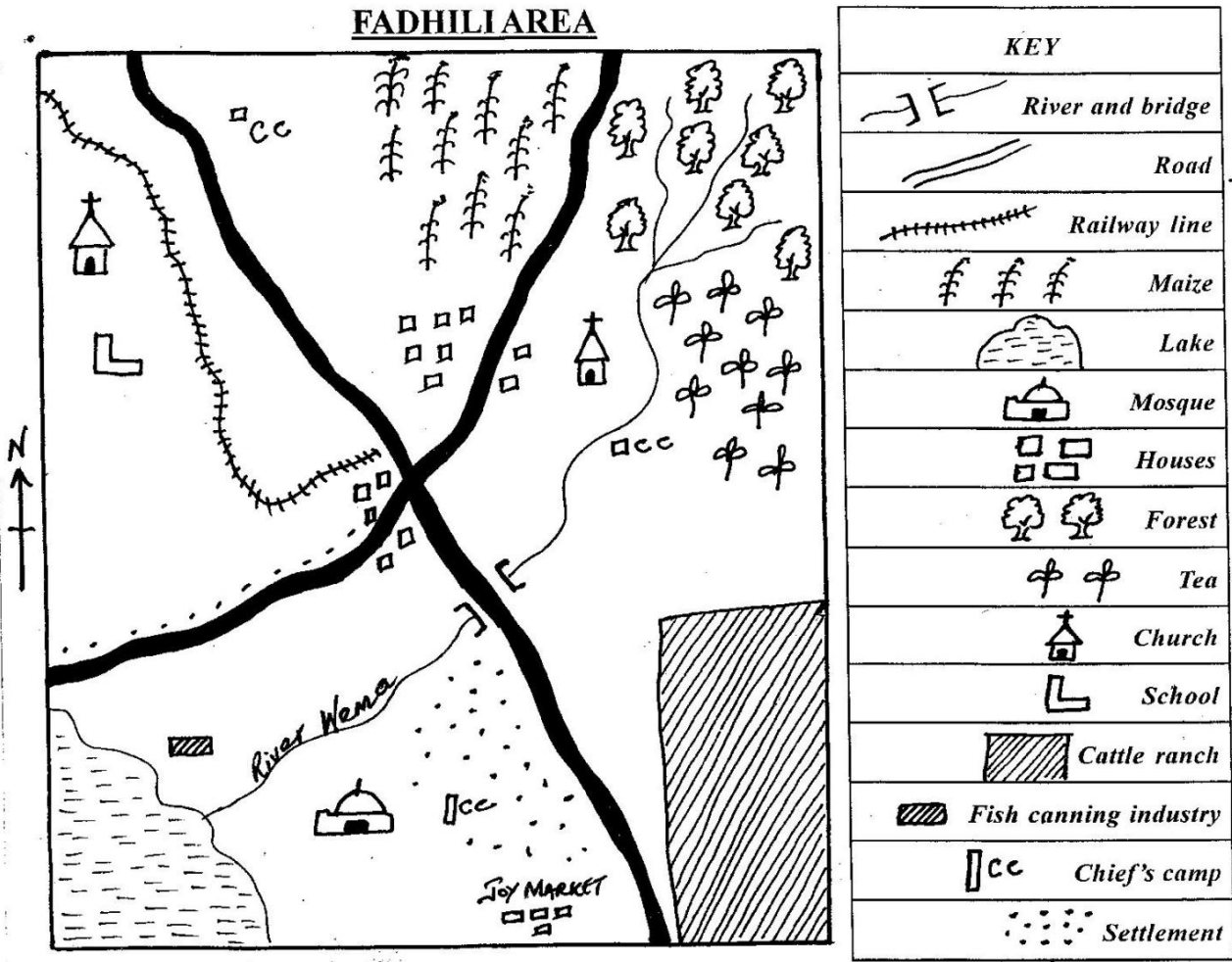



STD 5 MID TERM 2, 2017 SOCIAL STUDIES / CRE



Use the map of Fadhili area to answer questions 1-7.

- | | |
|---|---|
| <ol style="list-style-type: none"> 1. The major religion in Fadhili area is:-
A. Christianity B. Islam
C. Hinduism D. African religion 2. River Wema flows from _____
A. East to West
B. North East to North West
C. South East to North West
D. North East to South West 3. The senior most administrator in Fadhili area is:-
A. Chief B. District Commissioner
C. District Officer D. Sub-chief | <ol style="list-style-type: none"> 4. The MAIN economic activity in Fadhili area is:-
A. animal farming B. crop farming
C. fishing D. trading 5. The highest part in the area is most likely to be:-
A. at the forest B. around the lake
C. at the road junction D. around the cattle ranch 6. Which one of the following is the MAIN means of transport in the area?
A. Air B. Railway
C. Water D. Road 7. Which one of the following factors mainly led to the development of Fadhili town?
A. Source of water B. Transport
C. Farming D. Fishing |
|---|---|

8. Below are elements of a map. Which one is **NOT**?
A. Frame B. Key C. Compass D. Key
9. Below are fresh water lakes found in the Rift Valley of Kenya **EXCEPT**:-
A. L. Victoria B. L. Baringo
C. L. Naivasha D. L. Turkana
10. Mangrove swamps are mostly found:-
A. along the lake basin
B. along the coast
C. along the inland swamp
D. along the river valleys
11. The coastal lowlands the highlands and Rift Valley are:-
A. drainage features B. relief features
C. physical regions D. relief regions
12. Which one of the rivers given below has its source from Mt. Kenya?
A. R. Nzoia B. R. Ewaso Nyiro North
C. R. Yala D. R. Tana
13. What is the direction of Kenya from Uganda?
A. Western B. Eastern C. Northern D. Southern
14. All of the following are Bantu communities in Kenya. Which one is **NOT**?
A. Wadawida B. Abasuba C. Rendille D. Pokomo
15. The following are cultural artefacts **EXCEPT**:-
A. ornaments B. scriptures
C. carving D. weapons
16. All the following were taught in the traditional education **EXCEPT**:-
A. banking B. herding C. cooking D. hunting
17. People walking along the road are called:-
A. travellers B. walkers C. cyclists D. pedestrians
18. Which of the following is a beverage crop?
A. Sisal B. Cotton C. Coffee D. Flowers
19. The following are main language groups in Kenya. Which one is **NOT**?
A. Bantus B. Nilotes C. Cushites D. Portuguese
20. The direction where the sun sets is called:-
A. North B. West C. East D. South
21. Rainfall is measured by an instrument called:-
A. raingauge B. rain maker
C. windsock D. thermometer
22. The leading tourist attraction in Kenya is:-
A. wildlife B. mountains
C. beaches D. the Rift Valley
- 23.



- What is the weather shown?
A. Cloudy B. Rainy C. Sunny D. Clouds

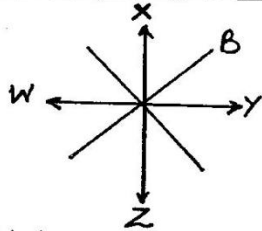
24. General elections in Kenya are held after ___ years.
A. 10 B. 20 C. 5 D. 3
25. The carrying away of soil by wind is also called:-
A. soil fertility B. soil texture
C. soil eroding D. soil erosion
26. The type of vegetation that grows along river is known as:-
A. swamp vegetation B. Riverline vegetation
C. papyrus vegetation D. mountain vegetation
27. The following are qualities of a good citizen. Which one is not?
A. Loyalty B. Patriotism
C. Selfishness D. Obedience
28. The third president of Kenya was known as:-
A. Mzee Jomo Kenyatta B. Uhuru Kenyatta
C. Daniel Moi D. Mwai Kibaki
29. The county is headed by a _____
A. senator B. speaker
C. governor D. member of county assembly
30. Today, Kenyans can interact in all the following ways **EXCEPT**:-
A. education B. intermarriage
C. war D. games and sports

Use the map of Kenya given below to answer questions 31-33.




31. The feature marked **B** on the map is:-
A. mountain B. swamp C. desert D. valley
32. The feature marked **C** is known as:-
A. Mt. Elgon B. Mt. Kulal
C. Cherangani hills D. Mt. Marsabit
33. The river marked **L** is:-
A. Athi B. Ewaso Nyiro C. Tana D. Turkwel
34. Which one of the following communities **DOES NOT** belong to the Western Bantus?
A. Abasuba B. Ambeere
C. Abakuria D. Abaluhya
35. If the number of people in a square kilometre is very low, the area is said to be:-
A. sparsely populated B. densely populated
C. congested D. depopulated

36. The counting of people after a period of time is called:-
 A. election B. registration C. census D. immigration
Use the diagram below to answer question 37.



37. Which is the common name given to points W, X, Y and Z?
 A. Main points B. Prime points
 C. Key points D. Cardinal points
38. Lake _____ is the largest lake in Kenya.
 A. Turkana B. Nakuru C. Naivasha D. Victoria
39. The climate around Moyale town is:-
 A. hot and wet B. hot and dry
 C. cool and wet D. cold and wet
40. Which one of the following is **NOT** a traditional means of communication?
 A. Horns B. Fire C. Wailing D. Letter
41. The quickest means of transport is by _____
 A. railway line B. air C. water D. land
42. Oil can be transported cheaply by:-
 A. road B. railway C. pipeline D. air
Use the diagram below to answer questions 43 and 44.



43. The diagram above shows the formation of:-
 A. orographic rainfall B. relief rainfall
 C. seasonal rainfall D. convectional rainfall
44. The side marked A is called:-
 A. windward side B. rain shadow
 C. seasonal rainfall D. convectional rainfall
45. Which of the following is **NOT** a child's right?
 A. The right to food B. The right to life
 C. The right to vote D. The right to education
46. The **BEST** way to resolve conflicts in the society is by:-
 A. keeping quiet B. revenging
 C. fighting D. negotiating
47. In Kenya, the minimum age at which a person should register as a voter is _____ years.
 A. 21 B. 35 C. 60 D. 18

48. A nuclear family consists of:-
 A. mother, father and children
 B. mother, father, nephews and daughters
 C. father, uncle and children
 D. mother, aunt and sons
49. The imaginary lines drawn on a map that runs from East to West are called:-
 A. longitudes B. latitudes C. altitudes D. equator
50. Three of the following are hardwoods except one. Which one is it?
 A. Mahogany B. Mvule C. Pine D. Meru oak
51. Dairy cattle is mainly kept for the production of:-
 A. skins B. milk C. wool D. meat
52. Lake Bogoria is famous for its _____
 A. flamingoes B. soda ash
 C. mineral deposits D. hot springs
53. The black colour on our national flag symbolizes:-
 A. the African people of Kenya
 B. peace in our country
 C. the blood shed during the struggle for independence
 D. vegetation cover showing the fertility of our land
54. The following are traditional industries **EXCEPT**:-
 A. pottery B. blacksmith
 C. glass making D. Boat building
55. The Waswahili people were as a result of:-
 A. intermarriage between coastal people and Mijikenda
 B. intermarriage between coastal people and Europeans
 C. intermarriage between coastal people and pokomo
 D. intermarriage between coast Bantus and the Arabs
56. The following are characteristics of age-sets except that:-
 A. they served as warriors together
 B. they became elders together
 C. they cultivated land
 D. they were initiated together
57. Which of the following types of soils is the most fertile?
 A. Loam soils B. Volcanic soils
 C. Black cotton soils D. Clay soils
58. The following is **NOT** a game played in the past. Which one?
 A. Running B. Football
 C. Wrestling D. Throwing sticks
59. The hotness or coldness of a place is called:-
 A. pressure B. humidity C. temperature D. air
60. What is the maximum period that a president can rule continuously in Kenya?
 A. 5 years B. 10 years
 C. 8 years D. 24 years

C.R.E

61. Stories of creation are recorded in which book?
A. Genesis B. Mathew
C. Exodus D. Revelation
62. When Jesus was born the angel appeared to _____
A. wisemen B. Mary C. Herod D. shepherd
63. On the sixth day God created _____
A. trees B. lakes C. wild animals D. birds
64. _____ united the people of Israel with God on Mt. Sinai.
A. Joseph B. Moses C. Jacob D. Abraham
65. The greatest commandment talks about:-
A. honouring parents
B. loving God above everything
C. observing the sabbath day
D. not committing murder
66. Jesus turned water into wine at Cana of Galilee. This was to show:-
A. He had power over wine
B. He had power to feed people with wine
C. He had power over nature
D. He was the son of God
67. "..... Where you go I will go, your people shall be my people....." The above words were said by:-
A. Naomi B. Rachel C. Leah D. Ruth
68. Jesus washed His disciples feet. This teaches Christians that:-
A. leaders to wash people's feet
B. God want our feet to be clean
C. leaders should serve others
D. disciples feet
69. Lazarus and his two sisters lived in:-
A. Galilee B. Capernaum C. Jericho D. Bethany
70. Which of the following is a fruit of the Holy Spirit?
A. Faith B. Knowledge C. Love D. Wisdom
71. _____ helped Jesus to carry the cross.
A. Pilate B. Simon of Cyrene
C. Joseph D. Judas
72. Who was stoned to death because of his faith?
A. Saul B. Peter C. James D. Stephen
73. The ten commandments are written in the book of:-
A. Genesis B. Exodus C. Psalms D. Numbers
74. In the traditional African society, people worshipped God in:-
A. shrines B. temples C. churches D. mosques
75. Which statement is not true according to traditional African society?
A. Boys and girls should not engage in sex before marriage
B. Boys and girls should respect their bodies
C. Boys and girls should express their love through sex
D. Boys and girls should exercise self control
76. Prophet _____ foretold the new covenant.
A. Jeremiah B. Daniel
C. Isaiah D. Ezekiel
77. On the cross Jesus said "*There is your son*".
John 19:26. Who was Jesus referring to?
A. Peter B. Andrew
C. John D. James
78. In the Lord's prayer we are required to forgive others for God to _____ us.
A. bless B. remember C. forgive D. know
79. Who among the disciples of Jesus was a pretender?
A. Simon B. Peter
C. James D. Judas Iscariot
80. Jesus raised the son of a widow from _____.
A. Nain B. Zeraphath
C. Shunem D. Cana
81. The first disciples of Jesus worked as _____ before Jesus called them.
A. tax collector B. fishermen
C. farmer D. tent maker
82. Three of the following are effects of irresponsible relationship between girls and boys. Which one is not?
A. School dropouts B. Child abuse
C. Teenage pregnancy D. Peace
83. Who took over leadership after the death of Moses?
A. Miriam B. Joshua
C. Caleb D. Aaron
84. The prodigal son was forgiven by his father because he asked for _____.
A. money B. sympathy
C. forgiveness D. mercy
85. The grandfather of Isaac was called:-
A. Terah B. Abraham
C. Jacob D. Joseph
86. Who among the following made a good choice?
A. Amos - fought with his friend
B. John - helped a blind man to cross the road
C. James - stole pupils books
D. Mark - copied other pupils work
87. Agnes found 500 shillings in the school compound. What advise can you give her?
A. Take the money home
B. Buy books
C. Thank God for such blessing
D. Take the money to her classteacher
88. When we are angry we should _____.
A. cry B. hide our anger
C. fight D. pray to control it
89. _____ saw the burning bush.
A. Moses B. Aaron C. Jacob D. Caleb
90. An agreement is the same as _____.
A. conversation B. argument
C. covenant D. convent