

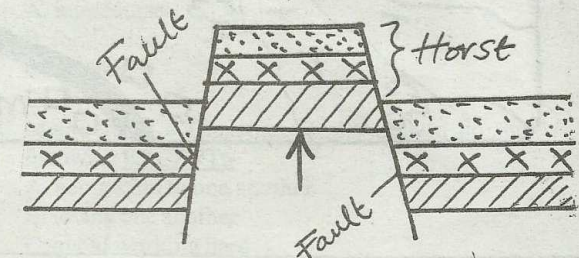




Use the map of Njiru area to answer questions 1 to 7.

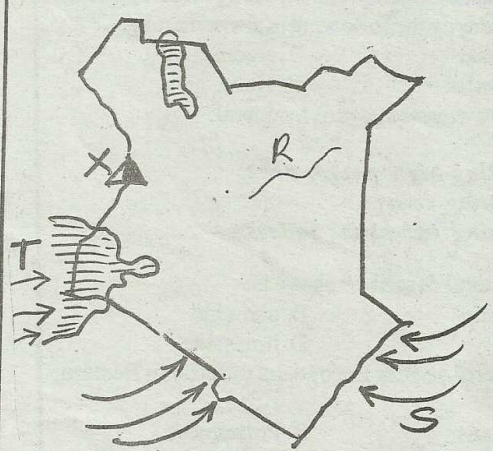
- The type of settlement in Njiru area include:-
  - linear and scattered
  - dense and linear
  - linear and nucleated
  - nucleated and scattered
- Who is the highest administrative officer in Njiru area?
  - Chief
  - D.O
  - D.C
  - Assistant chief
- The land in Njiru area slopes from:-
  - East - North
  - S. West - East
  - S. West - North East
  - North East - South West
- One of the following is **NOT** an economic activity carried out in Njiru area
  - Farming
  - Trading
  - Livestock keeping
  - Mining
- The religion of the people who live in the area covered by the map is likely to be:-
  - Hindu
  - Islamic
  - Christian
  - Protestants
- The climate of the South Eastern part of Njiru area is likely to be:-
  - cool and wet
  - hot and wet
  - hot and dry
  - cool and dry
- The direction of Tana school from the cattle dip is:-
  - S.E
  - S.W
  - N.W
  - N.E
- The **MAIN** reason for the construction of the Volta River Scheme was to:-
  - improve the living standards of the people
  - provide water for irrigation
  - promote tourist attraction in the country
  - provide H.E.P in the country
- Which one of the following is **NOT** a problem facing forestry in DRC?
  - There are big trees which are difficult to cut
  - There is a lot of illegal deforestation
  - It is difficult to built roads since the ground in always wet
  - Trees provide quality timber that are sold at high prices
- Three of the following favour pastoral farming in Africa. Which one **DOES NOT**?
  - The regions have poor soil for cultivation
  - Areas where practiced receive very low rainfall
  - There are a lot of tsetsefly in the region
  - There is plenty of grazing land
- The following are elements of weather **EXCEPT**:-
  - climate
  - temperature
  - rainfall
  - air pressure

- Which one of the following plateaus is **CORRECTLY** matched with the country where it is found?
  - Foulta Djalou - Guinea
  - Yatta - Tanzania
  - Jos - Cameroon
  - Bie - Kenya
- One of the following climatic regions of Africa found to the North and Southern parts of Africa. Which one is it?
  - Savannah grassland
  - Tropical rainforest
  - Mediterranean climate
  - Temperate climate
- The following were early visitors to Eastern Africa. Which one is the odd one out?
  - Seyyid Said
  - William Mackinnon
  - Carl Peters
  - Vasco Da Gama
- Which one of the following is **NOT** a traditional form of food storage?
  - Granaries
  - Silos
  - Basketry
  - Pots
- Countries that make up Eastern Africa include all the following **EXCEPT**:-
  - Zanzibar
  - Tanzania
  - Eritrea
  - Southern Sudan



- One of the following mountains was **NOT** formed as a result of the diagram drawn above. Which one?
- Danakil Alps
  - Pare
  - Ruwenzori
  - Inselberg
- Three of the following are contribution of cash crop growing to the economy of a country. Which one is **NOT**?
    - Farmers spend their money on leisure activities
    - Development of road network
    - Development of industries in a country
    - The country earns foreign exchange



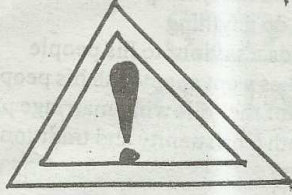
19. Which one of the following factors does not influence trade in Eastern Africa?
- Demand for goods
  - Availability of transport
  - Availability of currency
  - Security
20. The following is a description of a crop in Kenya:
- It produces white flowers
  - Flowers are used to manufacture insecticides
  - It is grown in the highland
  - It is mainly grown because of its flower
- The crop described is:-
- coffee
  - pyrethrum
  - cotton
  - cloves
21. Three of the following are soil conservation measures. Which one is **NOT**?
- Crop rotation
  - Over grazing
  - Contour ploughing
  - Terracing
22. The following would indicate that an area of a map receives heavy rainfall **EXCEPT**:-
- presence of many rivers
  - presence of forests
  - presence of scrub vegetation
  - presence of tea crops
23. Three of the following are items made by man during the old stone age. Which one is **NOT**?
- Choppers
  - Sickles
  - Fish hatches
  - Cleavers
24. The following describe a characteristics of a type of migration.
- looking for better living standards
  - transfers
  - population increases
  - good social amenities
- The type of migration described is known as:-
- urban-urban migration
  - rural-urban migration
  - urban-rural migration
  - rural-rural migration
25. The passing on of property of a deceased person to the rightful heirs is known as:-
- beneficiary
  - next of kin
  - wealth
  - inheritance
26. The following are roles of school management committee **EXCEPT**:-
- maintain the school traditions
  - ensure improvement of academic standards
  - organize fund raising
  - they sack teachers
27. One of the reasons why settlement schemes were established in Kenya was:-
- settle the landless
  - to produce high quality cattle
  - to provide housing to the people
  - to provide people with water and medicine
28. The following are types of marriage in Kenya. Which one allows polygamy?
- Hindus
  - Islamic
  - Religious
  - Civil
29. The capital of Old Ghana kingdom was at:-
- Wagara
  - Gao
  - Kumbi Saleh
  - Wagadugi
- Use the map below to answer questions 30-33.*
- 
30. The name of the river marked R is:-
- Turkwel
  - Ewaso Nyiro
  - Tana
  - Galana
31. The following is common among the people who followed the route marked T **EXCEPT**:-
- Abaluhya
  - Abagusi
  - Abaganda
  - Abakuria
32. The mountain marked X was formed as a result of the following process:-
- down warping
  - faulting
  - compression
  - volcanicity
33. All of the following are importance of the people who followed the route marked S to the East African Coast **EXCEPT**:-
- introduction of Swahili language
  - development of industries
  - introduction of slave trade system
  - introduction of school and hospital
34. The candidate who wins the presidential election in Kenya is sworn in by the:-
- speaker
  - head of civil service
  - Attorney General
  - Chief Justice



35. Which of the following is **NOT** a problem of rapid population growth?  
 A. High number of dependants  
 B. Increase in literacy levels  
 C. Strain on social services  
 D. Rise in social evils
36. The zero line of latitude is called:-  
 A. meridian  
 B. equator  
 C. latitude  
 D. tropical
37. The Baganda Nyamwezi were long distance traders which among the following is also a member?  
 A. Maasai  
 B. Ngoni  
 C. Akamba  
 D. Hehe
38. The following are uses of a mineral:  
 (i) making high quality pans  
 (ii) coating coins  
 (iii) lining industrial boilers
- The mineral described above is:-  
 A. copper  
 B. diamond  
 C. gold  
 D. limestone
39. Who were the first Europeans to settle in Eastern Africa?  
 A. Romans  
 B. Portuguese  
 C. Arabs  
 D. British
40. Which of the following statements is **TRUE**?  
 A. Climate and weather are the same  
 B. Climate is what happens on a particular day  
 C. Climate is the same as weather patterns  
 D. Climate is about seasonal patterns of weather
41. Which one of the following defines patriotism?  
 A. One who reveals the secret of the country  
 B. One who supports the ruling party  
 C. One who is loyal to his country  
 D. One who is opposed to the government
42. Which among the following was **NOT** a founder member of ANC in South Africa?  
 A. Thabo Mbeki  
 B. Walter Sisulin  
 C. Oliver Tambo  
 D. Anton Lindembe
43. The following are reason why Samori Toure was defeated by the French **EXCEPT:-**  
 A. he had superior weapons  
 B. there was disunity among the Africans  
 C. the French had better weapons  
 D. the French captured all trading routes
44. Which one of the following means of communication is mainly used in rural areas?  
 A. Fax  
 B. Telegram  
 C. Internet  
 D. Letters
45. Three of the following lakes are main fishing grounds in Kenya. Which one is **NOT**?  
 A. Lake Victoria  
 B. Lake Naivasha  
 C. Lake Bogoria  
 D. Lake Baringo
46. One of the following is **NOT** an importance of dairy farming:  
 A. provides milk and milk products  
 B. the areas where this practised is cool and wet  
 C. farmer earn a living from the sale of milk  
 D. bones from slaughtered animals are used to make fertilizers, glue, buttons
47. Cigarette making is an example of a:-  
 A. non-food processing industry  
 B. food processing industry  
 C. heavy industry  
 D. small scale industry
48. The following statements describes a country in West Africa:  
 (i) It was colonized by the British  
 (ii) It is a major producer of petroleum  
 (iii) The mouth river Niger is found in the country
- The country described above is:-  
 A. Ghana  
 B. Sierra Leone  
 C. Liberia  
 D. Nigeria
49. The Nyamwezi chiefdom was under the rule of a chief known as:-  
 A. Ntemi  
 B. Ssaza  
 C. Njuri Ncheke  
 D. Kabaka
50. In which of the region in Africa are the Fulani found?  
 A. Northern Africa  
 B. Western Africa  
 C. Southern Africa  
 D. Eastern Africa
51. Which one of the following is a least reason why people migrated in pre-colonial period?  
 A. Famine  
 B. Outbreak of diseases  
 C. In search of fertile soils  
 D. Increase in population
52. Which one of the following communities in Eastern Africa is **NOT** Semitic?  
 A. Nubian  
 B. Shilluk  
 C. Amhara  
 D. Bagara
53. The chief legal advisor to the government is:-  
 A. Law Society of Kenya  
 B. The judge  
 C. The Chief Justice  
 D. Attorney General
54. The following are factors that affect the climate of a place **EXCEPT:-**  
 A. meridians  
 B. latitudes  
 C. large water bodies  
 D. relief



55. The road sign below means \_\_\_\_\_



- A. do not overtake  
B. stop  
C. warning - danger  
D. one way traffic
56. General elections in Kenya are held after every \_\_\_\_\_ years.  
A. 4  
B. 10  
C. 7  
D. 5
57. The programme followed in a school everyday, weekly, termly, yearly is called:-  
A. school routine  
B. termly  
C. timetable  
D. lessons
58. Which one of the following countries is **NOT** crossed by the equator?  
A. Uganda  
B. Kenya  
C. Tanzania  
D. Somalia
59. Population increases can lead to all of these **EXCEPT:-**  
A. unemployment  
B. crime  
C. lack of enough schools  
D. sufficient food
60. The officer in charge of voting in a constituency is called a \_\_\_\_\_  
A. presiding officer  
B. returning officer  
C. polling clerk  
D. chairman IEBC

## SECTION II

### CHRISTIAN RELIGIOUS EDUCATION

61. Which one of the following was a duty given to human beings by God according to Genesis stories of creation?  
A. To spread God's message  
B. To obey God's command  
C. To condemn evil in the society  
D. To dress decently

62. Abraham was instructed by God to leave his people at Ur so that:-  
A. he could go and possess the land of promise  
B. he could start a new life in the state of Israel  
C. he could be the father of Isaac  
D. he could get out of the land where people practiced witchcraft
63. Which of the following prophets was sent by God to warn king Ahab about his wickedness?  
A. Nathan  
B. Elisha  
C. Elijah  
D. Gabriel
64. How did Jonathan show his true loyalty to David the youngest of Jesse?  
A. Promised to save David from the wrath of Saul his father  
B. Saved David from his father king Saul  
C. Made David to promise him his love  
D. He said to David that he was no longer in danger
65. During Passover the Israelites were instructed by God to:-  
A. fight the Egyptians  
B. put paint on their door posts  
C. bake bread using yeast  
D. kill a lamb and smear blood on the door posts
66. God sent me ahead of you to rescue in this amazing way and to make sure that you and your descendants survive. **Genesis 45:7**. These words were said by Joseph to:-  
A. his brothers  
B. his father  
C. his cousins  
D. the Israelites
67. Who among the following accompanied Moses to Egypt?  
A. Abraham  
B. Miriam  
C. Aaron  
D. Joshua
68. The journey of the Jews from Egypt to the promised land is referred to as the:-  
A. Passover  
B. Exodus  
C. Canaan  
D. Genesis
69. Who among the following was dedicated to God's service at an early stage?  
A. Saul  
B. Abraham  
C. Joseph  
D. Samuel
70. Who among the following leaders made Jesus and his parents to be refugees in Egypt?  
A. Moses  
B. Pharaoh  
C. Herod  
D. John the baptist
71. The man who was attacked by robbers on the road to Jericho was helped by a:-  
A. Levite  
B. priest  
C. Samaritan  
D. Jesus



72. Who among the following were parents of John the baptist?  
 A. Zachariah and Elizabeth  
 B. Zachariah and Mary  
 C. Joseph and Mary  
 D. Joseph and Elizabeth
73. I am preparing the way for the one who will come after me and is much greater. Who spoke these words?  
 A. Jesus  
 B. Joseph  
 C. Peter  
 D. John the baptist
74. According to the Lord's prayer we are forgiven our sins by God when we:-  
 A. do good  
 B. forgive those who have hurt us  
 C. go to church  
 D. pray always
75. Which one of the following parables of Jesus teaches Christians to treat their neighbours well? The parable of \_\_\_\_\_  
 A. the unforgiving servant  
 B. the friend at midnight  
 C. good samaritan  
 D. poor man and Lazarus
76. As He healed people, Jesus expected them to have one of the following qualities:-  
 A. trust  
 B. love  
 C. envy  
 D. faith
77. Eternal life means all the following **EXCEPT**:-  
 A. life that ends here in earth  
 B. everlasting life  
 C. life without an end  
 D. life that continues after death
78. The dove that came upon Jesus during baptism represented:-  
 A. holy water  
 B. holy fire  
 C. holy spirit  
 D. holy Eucharist
79. Which of the following books of the Bible is **NOT** a letter of Paul?  
 A. Ephesians  
 B. Luke  
 C. Corinthians  
 D. Timothy
80. The Holy spirit enables Christians to have all the following **EXCEPT**:-  
 A. understanding  
 B. courage  
 C. wisdom  
 D. fame
81. Traditional African believed that ancestors \_\_\_\_\_  
 A. lived in the spirit world  
 B. lived in heaven  
 C. lived in mountains  
 D. lived in the forests
82. Which one of the following statements about God in African traditional religion is **FALSE**?  
 A. God knows everything  
 B. God can do anything  
 C. God sends a saviour to his people  
 D. God makes a covenant with his people
83. Which one of the following marriage practices is found in both Christianity and traditional African communities?  
 A. Giving a ring  
 B. Paying dowry  
 C. Praying in church  
 D. Body decoration
84. The first rite of passage in Africa traditional religion is:-  
 A. initiation  
 B. marriage  
 C. death  
 D. birth
85. Which one of the following is **NOT** a challenge that Christians face today?  
 A. Temptation  
 B. Hatred  
 C. Rejection  
 D. Love
86. Children are told to respect their parents in order to:-  
 A. be called children of God  
 B. avoid punishment from parents  
 C. live longer on earth  
 D. escape curses from parents
87. Sexual relations between people who are not married is called:-  
 A. intercourse  
 B. fornication  
 C. adultery  
 D. love
88. Members of a Christian family should do the following **EXCEPT**:-  
 A. being kind to one another  
 B. loving one another  
 C. avoid working hard  
 D. trusting one another
89. Jane a std six was found copying from a text book during exam. What action should the teacher do?  
 A. Throw her out of class  
 B. Keep quiet about it  
 C. Tell her the dangers of copying  
 D. Let her continue copying from the book
90. People living with HIV/AIDS should be treated with compassion mainly because they:-  
 A. can easily infect others  
 B. need encouragement to continue with life  
 C. are looked down upon in the society  
 D. are outcasts