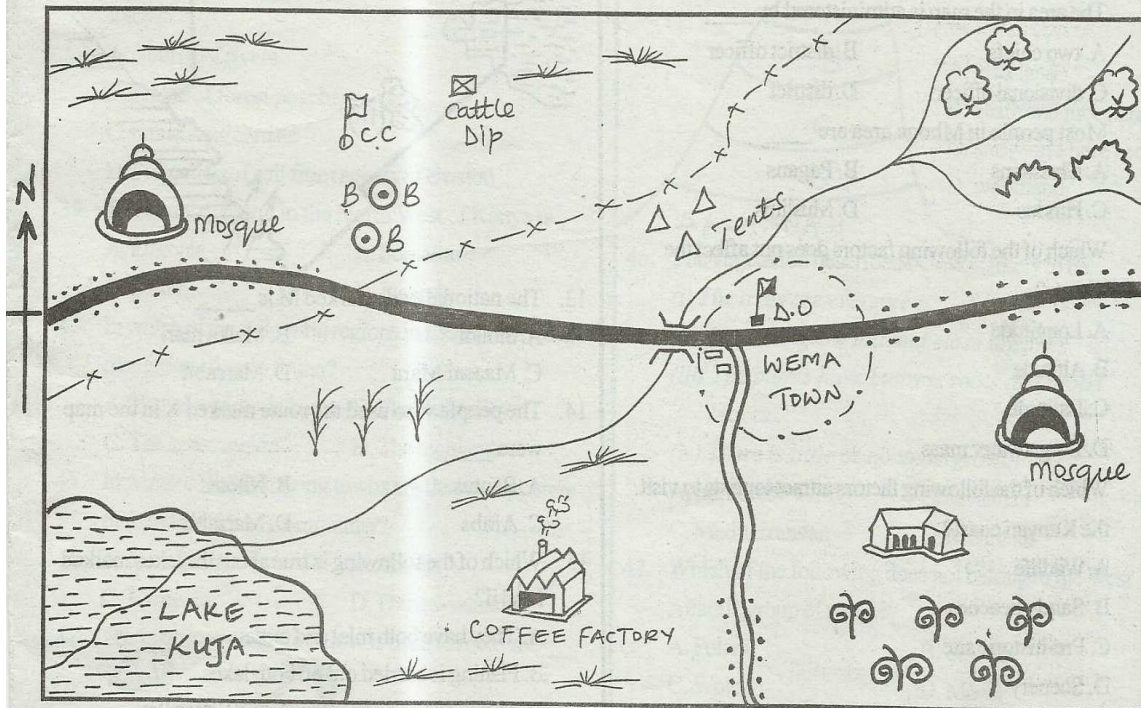


STD 7 - YEAR 2016

SOCIAL STUDIES / C.R.E

STUDY THE MAP OF MBOGA AREA AND ANSWER QUESTIONS 1-7.

MBOGA AREA



KEY SCALE: 0 1 2 3 4 5 6 7 8 9 10 11 12 13 14 15 Km

| | | | | | |
|--|---------------|--|---------------------|--|----------------------------------|
| | Tarmac road | | Locational boundary | | C.C. Chief's camp |
| | Murrum road | | Beans | | D.O. - District Officer's office |
| | Town boundary | | Bore holes | | Maize |
| | Forest | | Cash crops | | Settlement |

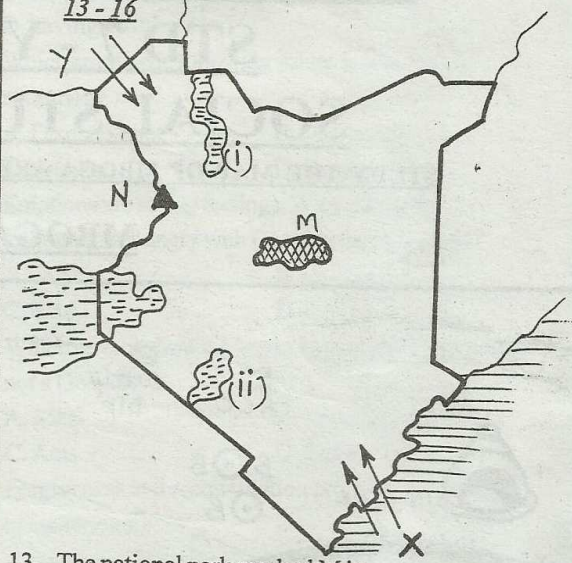
- The highest point in Mboga area is most likely to be _
 - at the forest
 - at the cattle dip
 - near the lake
 - at the D.O.'s office
- Which is the main economic activity of the people living in Mboga area?
 - Farming
 - Transporting
 - Trading
 - Fishing
- What is the length of the murrum road from the junction at Wema town to the Southern end of the map?
 - 9 km
 - 11 km
 - 6 km
 - 7 km
- The type of settlement in Mboga area can be described as _____

S/S & C.R.E. STD. 7

- A. nucleated
 - B. sparsely populated
 - C. linear
 - D. clustered
5. The cash crop that is not likely to be grown in the forested region in the map is ____
 - A. tea
 - B. coffee
 - C. pyrethrum
 - D. sisal
 6. The area in the map is administered by ____
 - A. two chiefs
 - B. district officer
 - C. divisional officer
 - D. district
 7. Most people in Mboga area are ____
 - A. Christians
 - B. Pagans
 - C. Hindus
 - D. Muslims
 8. Which of the following factors does not affect the climate?
 - A. Longitude
 - B. Altitude
 - C. Latitude
 - D. Large water mass
 9. Which of the following factors attract tourists to visit the Kenyan coast?
 - A. Wildlife
 - B. Sandy beaches
 - C. Pre-historic site
 - D. Scenery
 10. Three of the following are characteristics of traditional agriculture. Which one is not?
 - A. Farmers use simple tools
 - B. Farmers owned their land
 - C. Farmers depended on family labour
 - D. It was practiced in small scale
 11. Which of the following rivers drain water into the Indian ocean?
 - A. Yala, Turkwel, Ewaso Nyiro
 - B. Ruvuma, Rufiji, Kagera
 - C. Nyando, Athi, Shebelle
 - D. Shebelle, Rufiji, Tana
 12. Three of the following counties have maize grown on a large scale. Which one does not?
 - A. Nakuru
 - B. Trans-nzoia
 - C. Kiambu
 - D. Uasin Gishu

Use the map of Kenya below to answer questions

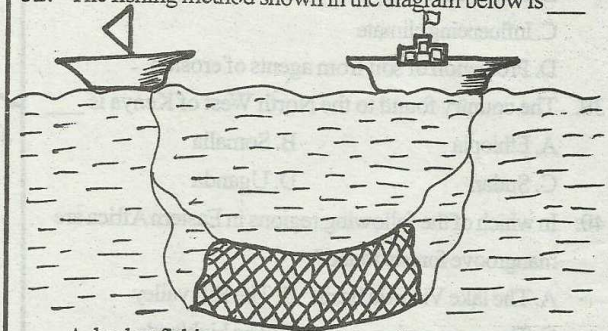
13 - 16



13. The national park marked M is ____
 - A. Sibiloi
 - B. Malka mari
 - C. Maasai Mara
 - D. Marsabit
14. The people who used the route marked X in the map were ____
 - A. Bantus
 - B. Nilotes
 - C. Arabs
 - D. Marsabit
15. Which of the following is true about the lakes marked i and ii?
 - A. They have both inlet and outlet
 - B. Fishing is carried out on both lakes
 - C. They both lie on the floor of the Rift valley
 - D. They are both fresh water lakes
16. The physical feature marked N is ____
 - A. Mt. Elgon
 - B. Mt. Kilimanjaro
 - C. Ruwenzori
 - D. Mt. Margaret
17. Which of the following communities are nilotes?
 - A. Dinka, Luo, Iraqw
 - B. Acholi, Abasuba, Nuer
 - C. Nyamwezi, Ngoni, Yao
 - D. Dinka, Acholi, Pokot
18. Which East African countries are landlocked?
 - A. Sudan and Djibouti
 - B. Uganda and Ethiopia
 - C. Somalia and Uganda
 - D. Eritrea and Uganda
19. The time in Accra 0° is 9.00 a.m. What will be the time in Nairobi 45°E?
 - A. 1.00 p.m.
 - B. 6.00 a.m.
 - C. 12.00 noon
 - D. 11.00 a.m.

20. Most rivers in Kenya are polluted by ____
 A. industrial chemicals B. domestic waste
 C. soil particles D. animal waste
21. Which of the below factors is not a positive factor influencing population growth?
 A. Good climate B. Fertile soil
 C. Peace and stability D. AIDS
22. Which of the following statements explains why most rivers in Africa are seasonal?
 A. A lot of water is used for irrigation
 B. The rainfall received is seasonal
 C. All the water drains away to the sea
 D. There are many dams across the rivers
23. Which of the following crops is not grown under irrigation in Eastern Africa?
 A. Tea B. Rice
 C. Cotton D. Sugarcane
24. The main reason why Arabs came to Eastern Africa was to ____
 A. establish settlement B. spread Islam
 C. drive Portuguese away D. Take part in trade
25. Which of the following is the correct order of the occurrence of seasons?
 A. Autumn → winter → summer → spring
 B. Winter → autumn → spring → summer
 C. Summer → autumn → winter → spring
 D. Autumn → spring → winter → summer
26. Which of the following is an example of a service industry?
 A. Bicycle repair B. Fruit canning
 C. Bread making D. Milk processing
27. The central part of Tanzania is unsuitable for dairy farming mainly because the area ____
 A. receives inadequate rainfall
 B. is sparsely populated
 C. has infertile soils
 D. is infected with tsetse flies
28. Who among the following leaders in Tanganyika united the Africans during the Maji Maji rebellion?
 A. Fundikira B. Mirambo
 C. Nyungu ya mawe D. Kinjeketile Ngwale
29. In Kenya, law and order is maintained by ____
 A. The Police
 B. The Army

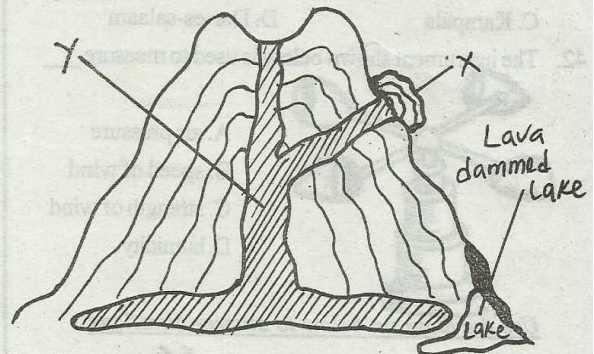
- C. The Prisons Department
 D. National Youth Service
30. Which of the following communities is correctly matched with its leader in traditional African societies?
 A. Nandi - Orkoiyot
 B. Ameru - Mugwe
 C. Maasai - council of elders
 D. Buganda - Lukiko
31. The earth revolves from ____ to ____
 A. East to West B. West to East
 C. North to East D. East to North
32. The fishing method shown in the diagram below is ____



- A. basket fishing B. trawling
 C. purse seining D. drifting

Use the diagram below to answer questions

33 - 35



33. The part labelled X in the diagram represents ____
 A. dyke B. magma
 C. vent D. subsidiary cone
34. Which of the following lakes in Africa was formed through the process above?
 A. L. Bangweulu B. L. Tanganyika
 C. L. Tana D. L. Victoria
35. The feature marked Y is called a ____
 A. dyke B. vent
 C. conelet D. magma

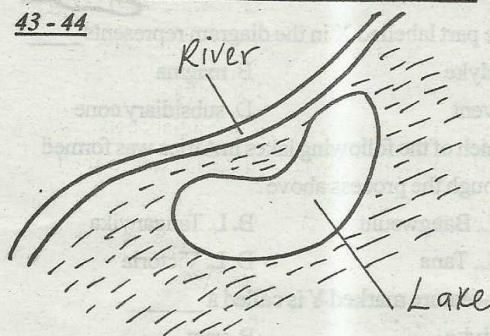
36. Which of the following Eastern African communities is not Cushitic?
 A. Iraqw B. Boran
 C. Rendille D. Samburu
37. The Bantus who settled in Southern Tanzania from South Africa were the ____
 A. Makonde B. Hehe
 C. Nyanwezi D. Ngoni
38. Which of the following is not an importance of forests?
 A. Source of rivers
 B. Home of forest poachers
 C. Influencing climate
 D. Protection of soil from agents of erosion
39. The country found to the North West of Kenya is ____
 A. Ethiopia B. Somalia
 C. Sudan D. Uganda
40. In which of the following regions in Eastern Africa are mangrove forests found?
 A. The lake Victoria basin B. The Rift valley
 C. The coast region D. The highlands
41. In which of the following towns are the headquarters of the East African Community?
 A. Nairobi B. Arusha
 C. Kampala D. Dar-es-salaam
42. The instrument shown below is used to measure ____



- A. air pressure
 B. speed of wind
 C. strength of wind
 D. humidity

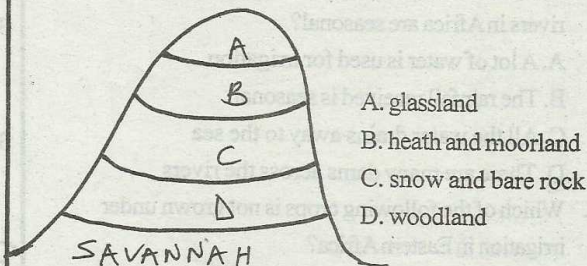
Use the diagram below to answer questions

43 - 44



43. The type of lake shown is ____

- A. man-made lake B. an ox-bow lake
 C. a crater lake D. an oasis
44. Which of the following lakes was formed through the above process?
 A. L. Utange B. L. Ngozi
 C. L. Shalla D. L. Chad
45. Use the diagram below to name the vegetation found at the area marked B



46. The vegetation described below is likely to be ____
 (i) The trees are evergreen
 (ii) The trees grow tall and close together
 (iii) The plants have buttress roots and broad leaves
 (iv) There is little or no undergrowth
 A. rainforest B. savannah
 C. Mediterranean D. Mountain
47. Which of the following does not belong to the West Atlantic group of people?
 A. Fulani B. Tokolor
 C. Wolof D. Mossi
48. Which of the following is used to measure atmospheric pressure?
 A. Anemometer B. Barometer
 C. Windsock D. Thermometer
49. Which of the following countries below is the second largest in Africa?
 A. Sudan B. DRC
 C. Algeria D. Angola
50. Below are functions of a clan. Which one is not?
 A. Owned land on behalf of the members
 B. Controlled grazing land
 C. Looked for wives for the young men
 D. Settled disputes among members
51. The sun is said to be overhead the Equator in ____
 A. April and March B. March, September
 C. June, December D. March, June

72. Which of the following is not a fruit of the Holy Spirit?
 A. Patience B. Preaching
 C. Humility D. Love
73. We overcome our disappointments by ____
 A. going to visit places
 B. hiding ourselves
 C. talking in loud voices
 D. sharing with others who can help us
74. The following happened during the day of Pentecost except ____
 A. Jesus ascended to heaven
 B. Noise from heaven
 C. Appearance of tongues of fire
 D. Saul was converted
75. Happy are the humble for they shall ____
 A. receive what God has promised
 B. God will comfort them
 C. Great reward is kept for them in heaven
 D. They shall see God
76. Who among the four below was not a prophet?
 A. Aaron B. Elisha
 C. Jeremiah D. Elijah
77. David was a good musician. He was talented in playing a _____ called harp
 A. song
 B. stringed musical instrument
 C. funny musical instrument
 D. big and large musical instrument
78. We improve our abilities in school by ____
 A. being proud B. going for training
 C. practising regularly D. being idle
79. Eternal life according to John 6:47 means ____
 A. everlasting life
 B. life that will ever end
 C. life without problems
 D. Never lasting life
80. The worldly form of behaviour and desires that the world considers important are referred to as ____ values
 A. bad B. Christian
 C. good D. secular
81. Putting God first and loving him above all other things means ____
 A. praying and singing when we are sad
 B. ignoring God
 C. having many gods
 D. having no other God
82. Which among the following values is acquired in education?
 A. Disobedience B. Dishonesty
 C. Copying D. Respect
83. Emotions are strong feelings. Who among the following was angry with David in the battle field?
 A. Jesse B. Goliath
 C. Saul D. Eliab
84. Which of the following books in the New Testament is not a Gospel?
 A. Mark B. John
 C. Acts D. Luke
85. Forgiveness and reconciliation promote ____ and ____ in a community
 A. peace and harmony B. patience and hatred
 C. beauty and goodness D. love and jealousy
86. Joseph the son of Jacob was sold by his brothers because they ____
 A. needed some food
 B. wanted to visit Egypt
 C. hoped to become rich through him
 D. were jealous
87. In the parable of the master and the three servants found in Matthew 25:14 - 30, the third servant was
 A. lazy and foolish
 B. active but foolish
 C. hardworking and excellent in his work
 D. poor and hardworking
88. When we treat others unfairly, we are practising ____
 A. discernment B. holiness
 C. judgement D. injustice
89. We can prevent HIV/AIDS by obeying one of God's commandment. Which one is it?
 A. Do not steal
 B. Love the Lord your God with all your heart
 C. Do not commit adultery
 D. Do not kill
90. Three of the following are reasons why Christians fast. Which one is not?
 A. To strengthen their faith in God
 B. To help shed off the extra weight from their bodies
 C. To seek God's intervention during a serious crisis
 D. To reflect on the life, death and resurrection of Jesus Christ