

STD 4 - YEAR 2016

SCIENCE

HOW TO USE THE ANSWER SHEET


1. Use only an ordinary pencil.

2. Make sure that you have written on the answer sheet:

(i) YOUR NAME (ii) NAME OF THE SCHOOL

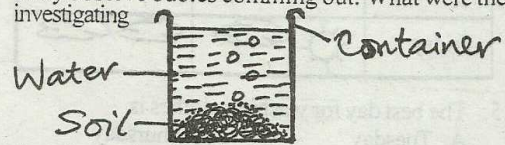
3. For each question show the correct answer by drawing a line in the bracket in which the letter you have chosen is written

TIME: 1HR. 40MINS

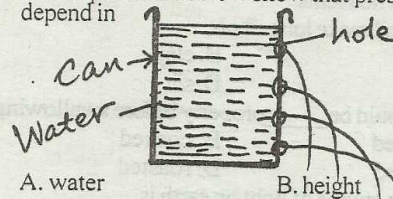
- Which of the following is NOT type of teeth?
A. incisors B. canines
C. enamel D. pre molar
- The tooth drawn below is used for

A. biting food
B. tearing food
C. grinding food
D. chewing food
- We should always brush our teeth
A. after every meal B. twice a day
C. in the morning D. before we sleep
- Plants that grow where they are not wanted are called
A. crops B. cereals
C. fruits D. weeds
- Crops grown are mainly grouped as
A. food and cash crop
B. legumes and cereals
C. cash and legumes
D. legumes and cereals
- The BEST method of weed control is
A. Use of chemicals B. digging them out
C. slashing D. up moting
- When seed grow into new plant we say
A. planted B. germinated
C. weed D. grown
- Which of the following is not used to describe weather
A. windy B. shinny
C. calm D. rainy
- Moon has different and size at different times of the month. These are called
A. phases of the moon B. faces of the moon
C. types of the moon D. shapes of the moon
- During which of these day is the shadow shortest
A. morning B. midday
C. evening D. afternoon
- Chicken kept to produce eggs are known as
A. boilers B. layers
C. poultry D. pullets
- Animals that are kept at home are called
A. wild B. domestic
C. forest D. dangerous
- A snail moves by
A. glinding B. swimming
C. hopping D. flying
- Which of the following small animals is NOT found

in the soil

- A. ants B. housefly
C. termites D. earthworm
- Std 3 pupils at Pundo school put a lump soil in a container and added water in the soil as shown below. They observe bubbles coming out. What were they investigating



- A. soil contain air B. water has air
C. soil has water D. soil living thing
- Which of the following soil used for building stone house
A. loam B. sand
C. clay D. cement
 - Which one give us strength to work and play
A. medical care B. sleep
C. food D. exercise
 - Aluoch was eating in a hurry because she was late for school. This is ___ table manners
A. good B. bad
C. nice D. none
 - The special ran that carry sick people to hospital is known as ___
A. fire bridges B. taxi
C. ambulance D. coach
 - The experiment below show that pressure in liquid depend in













- A. water B. height
C. depth D. hole
- A simple tool which is used when climbing very high wall is called?
A. axe B. wheelbarrow
C. ladder D. handcart
 - An adult person has ___ molars
A. 6 B. 12
C. 20 D. 8
 - HIV stand for
A. Human induce virus
B. Human immunity virus

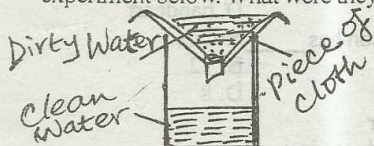
Std 4 Science

- C. Human immuno deficiency virus
D. Human imuno deficiency virus
24. An example of plant that cannot be eaten before cooking is
A. carrots B. Tomatoes
C. oranges D. wheat

Use the table below to answer questions 25-26

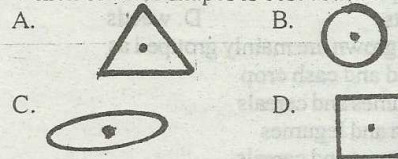
DAY	MORNING	AFTERNOON
Monday		
Tuesday		
Wednesday		
Thursday		
Friday		

25. The best day for washing clothes is
A. Tuesday B. Thursday
C. Friday D. Monday
26. Which day did the pupils carry umbrella to school through out the day
A. Friday B. Tuesday
C. Thursday D. Monday
27. Which of the following animal protects itself through stinging
A. bees B. termites
C. snails D. cockrach
28. A young one of a cow is called
A. puppy B. calf
C. piglet D. foal
29. The main reason why we boil water before we drink is
A. to make it warm for drinking
B. to kill germs
C. to make it sweet
D. to add nutrients
30. Which soil make long ribon
A. sand B. clay
C. loam D. silt
31. Food should be _____ properly before swallowing
A. chewed B. cocked
C. washed D. roasted
32. The main source of light on earth is
A. electricity B. lamps
C. torches D. sun
33. A std 3 pupil at Lwanda primary school did the experiment below. What were they investigating



34. Sound moves in _____ direction
A. two B. all
C. some D. one

35. The falling out of the first of teeth one by one to be replaced by permanent teeth is called
A. tooth decay B. dental cavities
C. bleeding gums D. sheeding
36. The special thread is used to clean between the teeth is called
A. dental floss B. tooth pick
C. nylum D. tooth brush
37. Which weed is a poisonous to human being and other animals
A. pig weed B. night black shade
C. oxalis D. thorn apple
38. Which of the following is not seen at night
A. moon B. stars
C. clouds D. sun
39. Which of these are domestics animals
A. goat B. fish
C. frog D. cockroach
40. The meat from sheep is called
A. beef B. pork
C. chicken D. mutton
41. Which one is not a source of water
A. rain B. tap
C. well D. dam
42. Which of these shapes is best used as a wheel



43. Having bleeding gum is a disease called
A. plague B. givities
C. dental cavities D. cavities
44. To have a strong teeth we need to eat the following food except
A. apples B. raw carrots
C. sugarcane D. biscuits
45. Which type of weed is a vegetable
A. pigweed B. sodom apple
C. black jack D. oxalis
46. Uses of wind are the following except
A. winnowing B. blowing soil away
C. sailing boat D. turning wind mill
47. Which of the following animals in the farm give us milk
A. goat B. camel
C. cow D. donkey
48. The doctor who treats our teeth is called?
A. optician B. dentist
C. doctor D. nurse
49. A small animals that has many legs is called
A. grasshopper B. caterpillar
C. millipede D. tick
50. Which of the following is not a sense organ
A. nose B. eyes
C. hands D. ears