

# STD 3 - YEAR 2016

## MATHEMATICS

YOUR NAME \_\_\_\_\_

NAME OF YOUR SCHOOL \_\_\_\_\_

**Add**

1.  $46 + 12 =$  \_\_\_\_\_
2.  $152 + 90 =$  \_\_\_\_\_
3.  $35 + 330 =$  \_\_\_\_\_
4. 
$$\begin{array}{r} 508 \\ + 361 \\ \hline \end{array}$$

5.  $274 + 184 =$  \_\_\_\_\_

6. What is the place value of digit 8 in 8004? \_\_\_\_\_

7.  $9721 =$  \_\_\_\_\_ thousands \_\_\_\_\_ hundreds \_\_\_\_\_ tens \_\_\_\_\_ ones

8. Share 48 mangoes among 6 boys = \_\_\_\_\_

**Fill in the missing numbers**

9. 92, \_\_\_\_\_, 94, \_\_\_\_\_, 96, \_\_\_\_\_, \_\_\_\_\_

10. 3000, 3100, 3200, \_\_\_\_\_

11. The sixth day of the week is \_\_\_\_\_

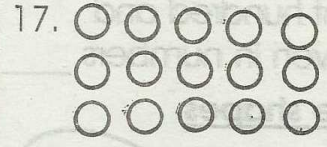
12. 
$$\begin{array}{r} 3 \overline{) 27} \\ \underline{\phantom{00}} \\ \phantom{00} \end{array}$$

13. Divide 24 by 6 = \_\_\_\_\_

14. 
$$\begin{array}{r} 10 \\ \times 7 \\ \hline \end{array}$$

15.  $199 - 1 =$  \_\_\_\_\_

16. 1 hour = \_\_\_\_\_ minutes



\_\_\_\_\_ x \_\_\_\_\_ = \_\_\_\_\_

18. 
$$\begin{array}{r} \text{Shs.} \quad \text{Cts.} \\ 84 \quad 85 \\ -13 \quad 15 \\ \hline \end{array}$$

19. A spider has eight legs. How many legs do five spiders have? \_\_\_\_\_


20. Arrange from the smallest to the largest. 14, 8, 21, 15, 2, 39

21. 
$$\begin{array}{r} 800 \\ -800 \\ \hline \end{array}$$

22. Nancy had 66 rabbits. She bought 20 more. How many rabbits did she have altogether? \_\_\_\_\_

23.  $42 \div 6 =$  \_\_\_\_\_

24. Which is heavier? \_\_\_\_\_




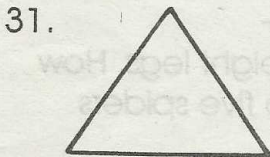
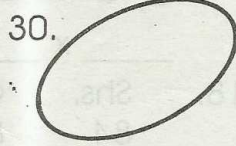

25. 2 five shillings coins = \_\_\_\_\_  
1 shilling coins \_\_\_\_\_

26.  $85\text{ m}$   
 $- 19\text{ m}$   
\_\_\_\_\_

27. 4 tens 5 ones = \_\_\_\_\_

28. Write eight hundred and twenty seven in numbers \_\_\_\_\_

**Name the shapes**

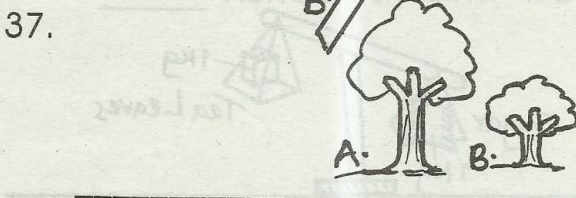
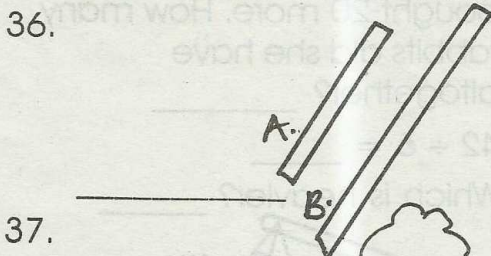


33.  $\frac{1}{2}$  of 24 = \_\_\_\_\_

34. Which number comes after 88? \_\_\_\_\_

35. Subtract 9643 from 9876 = \_\_\_\_\_

**Which one is taller or longer?**



38. James is 50 cm tall and Irene is 56 cm tall. Who is taller?  
\_\_\_\_\_

39.  $8 \times 6 \times 0 =$  \_\_\_\_\_

40. 2 years have \_\_\_\_\_ months

41. What is the sum of 231 and 7  
= \_\_\_\_\_

42. 

Weeks	days
7	4
- 4	4
_____	

43. 

Shs.	Cts.
89	75
+ 10	60
_____	

44. Write in words 6031 = \_\_\_\_\_

45. What is 86 less than 200 \_\_\_\_\_

46. Your teacher's height is \_\_\_\_\_  
(2 km, 2m, 2 cm)

47.  $\square + 3 + 4 = 15$

48. A pen costs sh. 5. How much would 3 pens cost? \_\_\_\_\_

49.  $50 \div 10 =$  \_\_\_\_\_

50. How many triangles are shown?  
\_\_\_\_\_

