





STD 1 - YEAR 2016

MATHEMATICS

YOUR NAME _____ NAME OF YOUR SCHOOL _____

Count and write

1.  +  = _____

2.  -  = _____

3. $6 + 3 =$ _____

4. $11 - 9 =$ _____

5. $2 + 2 + 4 + 1 =$ _____

6. $8 - 3 - 3 =$ _____

Fill in the missing numbers

7. 51, 52, _____, _____, 55, _____, _____, 58

8. 28, _____, 26, 25, _____, _____, 22

Write in figures / words


9. 22 _____

10. 16 _____

11. Twenty eight _____

12. Nineteen _____

13. Who is taller?




14. _____ ones _____ tens = 17

15. $3 + \square = 8$

16. $\square + 2 = 16$

17. Five take away one = _____

What shape?



18. C is a _____

19. D is a _____

20. E is a _____
(triangle, circle, rectangle)

21. $\begin{array}{r} 45 \\ - 2 \\ \hline \end{array}$	(22). $\begin{array}{r} 90 \\ - 60 \\ \hline \end{array}$
--	---

23.
$$\begin{array}{r} 23 \\ +71 \\ \hline \end{array}$$

(24).
$$\begin{array}{r} 13 \\ +7 \\ \hline \end{array}$$

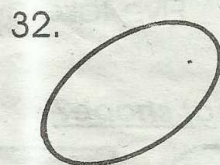
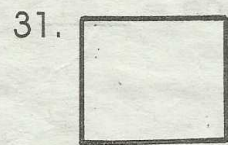
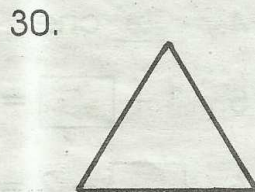

25. There are _____ months in a year

26. There are _____ days in a week

27. 5 tens + 6 ones = _____

28. 6 tens + 2 tens = _____

Name the shapes



(square, triangle, oval, star, rectangle)

33. Two boys have _____ hands

34.
$$\begin{array}{r} 70 \\ +10 \\ \hline \end{array}$$

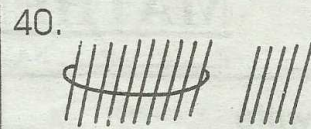
35. $6 - 4 - 2 =$ _____

36. 7 days = _____ week

37. We are in the month of _____

38. $0 + 7 =$ _____

39. $4 + 3 + \square = 10$



_____ tens - _____ ones = _____

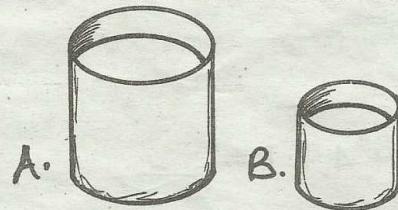
41. Take away 20 from 40 = _____

42.

8		10		12
---	--	----	--	----

43. Twelve plus six = _____

44. Which one holds less water?




45. $50 - 20 = \square$

46. $\square - 4 = 2$

47. 7 eggs + 3 eggs = _____

48.  +  = _____

49. Write from the smallest to the largest. 19, 9, 13, 10, 17

50.  This is a _____ line (straight, curved, oval)